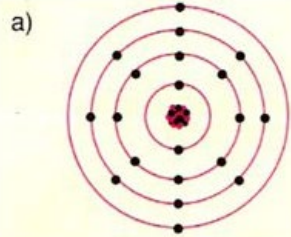


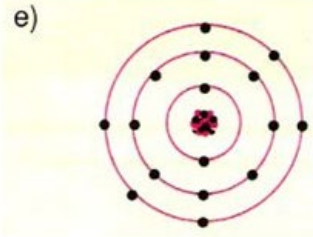


Periyot	Grup	İsmi	Sembölü	Atom numarası
1	8A			
2	1A			
2	3A			13
2	4A			
2	7A			
3	2A			
3	8A		Ar	

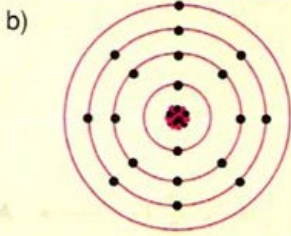
Aşağıdaki elementlerin hangi katmanda( periyotta) hangi grupta olduğunu bulunuz



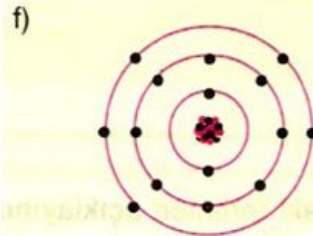
?



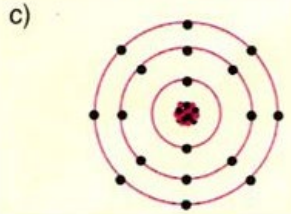
?



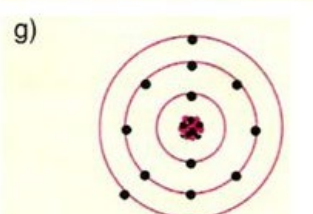
?



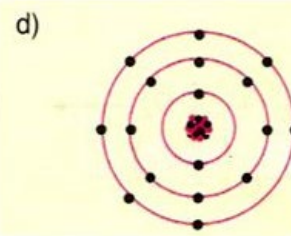
?



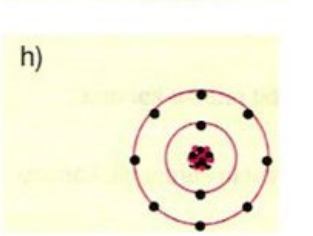
?



?



?



?